

Holiday homework for winter vacation
(2015-2016)



डी. ए.वी पब्लिक स्कूल

सेक्टर-6 द्वारका

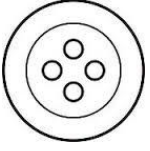
रेफरन्स न.

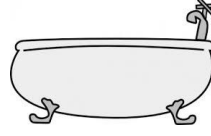
दिनांक

नाम

कक्षा.....

चित्र देख कर अक्षर लिखो










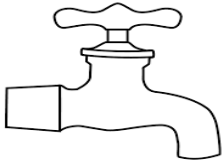
रिक्त स्थान भरो



मग



टर



ल



बत

लय वाले शब्द

महल - _____

चमक- _____

नरम - _____

सड़क - _____

डी. ए.वी पब्लिक स्कूल

सेक्टर-6 द्वारका

रेफ़रन्स न.

दिनांक

नाम

कक्षा.....

शब्द लिखो

दो वर्ण

तीन वर्ण

चार वर्ण

| | | |
|-------|-------|-------|
| _____ | _____ | _____ |
| _____ | _____ | _____ |
| _____ | _____ | _____ |
| _____ | _____ | _____ |

DAV Public School

Sector VI, Dwarka, New Delhi

Ref.no. _____

Date _____

Subject- English

Name _____

Class- Pre Primary _____

Write the correct vowel in the given box to make a word.



| | | |
|---|--|---|
| r | | m |
|---|--|---|



| | | |
|---|--|---|
| h | | n |
|---|--|---|



| | | |
|---|--|---|
| g | | m |
|---|--|---|



| | | |
|---|--|---|
| k | | t |
|---|--|---|

a e i o u

Ref.no. _____


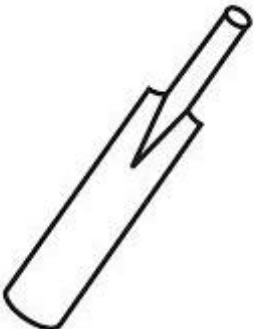


Date _____

Subject- English

Name _____

Class- Pre Primary _____

Look at the picture & make a word from the given letters.

| | | | | | | | | | |
|---|---|---|---|---|---|---|---|--|---|
|  | <table border="1"><tbody><tr><td>c</td><td>-</td><td>a</td><td>m</td></tr><tr><td>x</td><td>i</td><td>t</td></tr></tbody></table> | c | - | a | m | x | i | t | <p>_____</p> <p>_____</p> <p>cat</p> <p>_____</p> |
| c | - | a | m | | | | | | |
| x | i | t | | | | | | | |
|  | <table border="1"><tbody><tr><td>b</td><td>a</td><td>k</td></tr><tr><td>j</td><td>o</td><td>t</td></tr></tbody></table> | b | a | k | j | o | t | <p>_____</p> <p>_____</p> <p>_____</p> | |
| b | a | k | | | | | | | |
| j | o | t | | | | | | | |
|  | <table border="1"><tbody><tr><td>c</td><td>i</td><td>m</td></tr><tr><td>j</td><td>a</td><td>t</td></tr></tbody></table> | c | i | m | j | a | t | <p>_____</p> <p>_____</p> <p>_____</p> | |
| c | i | m | | | | | | | |
| j | a | t | | | | | | | |
|  | <table border="1"><tbody><tr><td>f</td><td>e</td><td>n</td></tr><tr><td>t</td><td>a</td><td>p</td></tr></tbody></table> | f | e | n | t | a | p | <p>_____</p> <p>_____</p> <p>_____</p> | |
| f | e | n | | | | | | | |
| t | a | p | | | | | | | |

Ref.no. _____



Date _____

Worksheet
Subject- EVS




Name _____

Class- Pre Primary _____


1. Draw the tools of each helper in the space provided?




2. Match the animals with their homes?




3. Label the different parts of a plant?

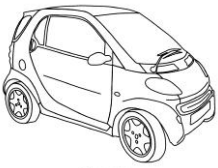


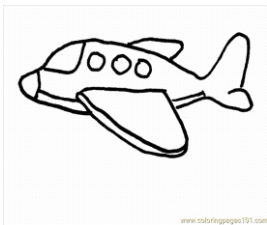
4. Draw a circle on living things and cross the non living things?



5. See the below pictures and write W for water transport, L for land transport and A for air transport?







WORKSHEET**Subject: Mathematics**

Name-_____

Class-Pre-Primary

Q1. Fill the missing numbers.

a. 59 _____ 62 _____

b. 88,89 _____ 93

Q2. What comes

Before

After

Between

_____ 74

46 _____

39 _____ 41

_____ 30

51 _____

79 _____ 81

Q3. Solve.

$$\begin{array}{r} 13 \\ + 5 \\ \hline \end{array}$$

$$\begin{array}{r} 16 \\ - 8 \\ \hline \end{array}$$

$$\begin{array}{r} 11 \\ + 7 \\ \hline \end{array}$$

$$\begin{array}{r} 14 \\ - 4 \\ \hline \end{array}$$

$$\begin{array}{r} 17 \\ - 0 \\ \hline \end{array}$$

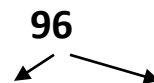
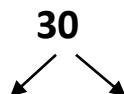
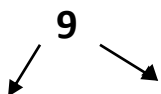
Q4. Mental Maths

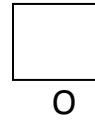
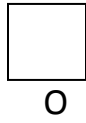
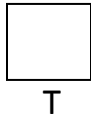
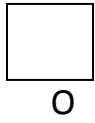
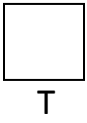
a. $10 - 5 =$ _____

b. $12 - 6 =$ _____

c. $13 + 4 =$ _____

Q5. Concept of tens and ones.

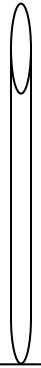




Q6. Draw the beads on abacus.

T


O



56

T

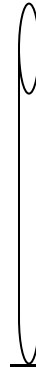
O



40

T

O



6

Q7. Draw two objects of each

a. Light weight



b. Heavy weight



Join the dots from 1 to 50 in sequence and complete the picture.

Now color it.

