

DAV MODEL SCHOOL, KSTP, ASANSOL
HOLIDAY HOMEWORK WORKSHEET 1

SESSION 2024 – 25

SUBJECT: ENGLISH

CLASS: VIII

NAME _____ CLASS ___ SEC ___ ROLL NO _____

1. Read the passage carefully and answer the questions.

Caged behind thick glass, the most famous dancer in the world can easily be missed in the National Museum, Delhi. The Dancing Girl of Mohenjodaro is a rare artifact that even schoolchildren are familiar with. Our school textbooks also communicate the wealth of our 5000-year heritage of art. You have to be alert to her existence there, amid terracotta animals to rediscover this bronze image.

One discovers that the dancing girl has no feet. She is small, a little over 10 cm tall – the length of a human palm – but she surprises us with the power of great art – the ability to communicate across centuries.

A series of bangles – of shell or ivory or thin metal – clothe her left upper way down to her fingers. A necklace with three pendants bunched together and a few bangles above the elbow and wrist on the right-hand display almost modern art.

She speaks of the undaunted ever hopeful human spirit. She reminds us that it is important to visit museums in our country to experience the impact that a work of art leaves on our senses, to find among all the riches one particular vision of beauty that speaks to us alone.

a) Select the option that displays the information not given in the passage.

- i) The girl is caged behind glass.
- ii) She is a rare artifact.
- iii) School books communicate the wealth of our heritage.
- iv) She cannot be rediscovered as she's artwork.

Ans _____

b) On the basis of your reading of the given passage, write any one interesting fact about the Dancing girl of Mohenjo-Daro.

Ans _____

c) What does the dancing girl remind us? Mention any two points from the passage.

- i. _____
- ii. _____

d) Find the word from the last para which means the same as the following.
'Still determined, despite difficulties, dangers and disappointment.'

Ans _____

e) Which of these is FALSE?

- i) The dancing girl has no feet.
- ii) She is small.
- iii) She is little bigger than the human palm.
- iv) She is a little over 10 cm tall.

Ans _____

(f) In the question below, there are two statements marked as Assertion (A) and Reason (R). Read the statements carefully and choose the correct option.

Assertion (A): Great Art has power

Reason (R): It has the ability to communicate across centuries.

- (A) Both A and R are true, and R is the correct explanation of A.
- (B) Both A and R are true, but R is not the correct explanation of A.
- (C) A is true, but R is false.
- (D) A is false, but R is true.

Ans _____

2. Fill in the blanks with the appropriate tenses of the verbs given in the brackets.

- (a) We _____ for the train for two hours now. (wait)
- (b) Mr Sharma _____ a novel these days. (write)
- (c) The children _____ the room before the guests arrived. (clean)
- (d) I _____ a model of the market place at 6.00 p.m. yesterday. (make)
- (e) By the year 2100, digital books _____ the printed books. (replace)
- (f) The outcome depends on how we _____ ourselves. (prepare)

3. The following passage has not been edited. There is an error in each line. Write the wrong words as well as the corrected ones in the space provided.

	Incorrect	correct
I come in very late last night.	_____	_____
Unfortunately the dog wake up and	_____	_____
it started to bark. This awake my	_____	_____
mother. She go back to her room	_____	_____
and telephone the police.	_____	_____

DAV MODEL SCHOOL, KSTP, ASANSOL

HOLIDAY HOMEWORK WORKSHEET 2

SESSION 2024 – 25

SUBJECT: ENGLISH

CLASS: VIII

NAME _____ CLASS ____ SEC ____ ROLL NO ____

4. Answer the following questions.

(a) Why did the king go to the wise hermit? Why did he go there alone and dressed like a commoner?

Ans _____

(b) Who was the bearded man who came running from the woods? How had he got wounded?

Ans _____

(c) Read the extract given below and answer the questions that follow.

“We sighed with relief and tucked her up well.
Poor Granny! For her, it was like a brief season in hell,

(a) Why did the narrator and his family ‘sigh in relief’?

Ans _____

(b) Why was Granny confined to bed? Why did she find it ‘a brief season in hell’?

Ans _____

(c) How did she finally get rid of this ‘season in hell’?

Ans _____

5. Briefly explain the answers the king got to his three questions.

Ans _____

6. “My grandmother was a genius.” Elucidate the statement.

Ans _____

7. You are Rahul/Renu Sharma, the Cultural Secretary of Kiran Public School, Noida. Your school is organising an Inter House Debate Competition for the students of classes VI – VIII. Draft a notice inviting the students to participate. Include all the necessary details.(50 words)

8. You visited a blind school. You were moved to see the conditions of the children there. Write a diary entry describing your feelings.

Ans _____

D.A.V. MODEL SCHOOL, KSTP, ASANSOL
HOLIDAY HOME WORK (SUMMER VACATION)
SESSION: 2024-2025

SUBJECT: HINDI

CLASS : VIII

Worksheet -1 (अध्याय -1 हम पंछी उन्मुक्त गगन के)

Name: _____ Class: _____ Sec _____ Roll No: _____

Signature of the evaluator _____

1. 'आशीवाद' शब्द में उपयुक्त स्थान पर ' र ' रूप का प्रयोग कर शब्द दोबारा लिखिए।

2. 'जुल्म' शब्द में उचित स्थान पर नुक्ता का प्रयोग कीजिए।

3. 'विषाद' शब्द का विलोम रूप लिखिए।

4. 'भावनाए' शब्द में उचित स्थान पर अनुनासिक का प्रयोग कीजिए।

5. 'किरण' का समान अर्थ वाले शब्द लिखिए।

6. कैद किए गए पक्षियों से अगर आपका संवाद होता तो वे कौन सी पीड़ा व्यक्त करते, अपने शब्दों में अपना विचार लिखिए।

D.A.V. MODEL SCHOOL, KSTP, ASANSOL
HOLIDAY HOME WORK (SUMMER VACATION)
SESSION: 2024-2025

SUBJECT: HINDI

CLASS : VIII

Worksheet – 2 (अध्याय -2 असल धन)

Name: _____ Class: _____ Sec _____ Roll No: _____

Signature of the evaluator _____

1. 'अक्षि' शब्द का तद्भव रूप लिखिए।

2. 'खेत' शब्द का तत्सम रूप लिखिए।

3. निम्नलिखित वाक्य में उचित स्थान पर विराम चिह्न का प्रयोग कीजिए।

आंटी आंटी मम्मी ने आपकी साड़ियाँ प्रेस करवा कर भेजी हैं

4. असल धन कहानी के आधार पर बताइए कि जीवन में दारा के लिए असल धन क्या था?

5. दरबारी दारा से ईर्ष्या क्यों करते थे? पाठ के आधार पर उत्तर लिखिए।

D.A.V. MODEL SCHOOL
HOLIDAY HOMEWORK WORKSHEET – I

CLASS : VIII

SUBJECT : BENGALI

NAME: _____ SEC: _____ ROLL: _____

(TOPIC: শকুন্তলার পতিগৃহে যাত্রা, লালু, ধাতু ও ক্রিয়াপদ)

১। নিচের প্রশ্নগুলির উত্তর দাও।

ক) "শকুন্তলার পতিগৃহে যাত্রা" গদ্যাংশটি কার লেখা, কোন্ মূল গ্রন্থ থেকে নেওয়া হয়েছে?

উ: _____

খ) "তোমরা সকলে অনুমোদন করো" - কে, কাকে এ কথা বলেছে?

উ: _____

গ) বনতোষিনী কে? শকুন্তলা বনতোষিনীকে কার হাতে সমর্পণ করেছিল?

উ: _____

ঘ) শকুন্তলার দুই প্রিয় সখীর নাম কী? তাদের সম্পর্কে সংক্ষেপে লেখ।

উ: _____

ঙ) শকুন্তলাকে পতিগৃহে পাঠানোর আগে কণ্ঠমুনি কি কি উপদেশ দিয়েছিলেন?

উ: _____

২। নিচের প্রশ্নগুলির উত্তর দাও।

ক) "শাস্ত্রবাক্য মনে আছে তো" - শাস্ত্রবাক্যটি কি?

উ: _____

খ) লালুর বন্ধুদের নাম কি?

উ: -----

গ) গোপাল খুঁড়ো ভয়ে কোথায় আশ্রয় নিয়েছিল?

উ: -----

ঘ) গোপাল খুঁড়োর জীবনের ব্রত কি?

উ: -----

ঙ) শ্মশানের আধক্রোশ দূরে কাদের ঘর ছিল?

উ: -----

৩। "নিজেদের নিবুদ্ধিতায় অত্যন্ত লজ্জা পেয়ে, সবাই ফিরে এলাম।" - কাদের নিবুদ্ধিতায়, কেন সবাই লজ্জা পেল? গোপাল খুঁড়ো তখন কি করলেন?

উ: -----

৪। নীচের প্রশ্নগুলির উত্তর দাও।

ক) ধন্যাত্মক ধাতু কাকে বলে? উদাহরণ দাও।

উ: -----

খ) সংযোগ মূলক ধাতু কাকে বলে? উদাহরণ দাও।

উ: -----

গ) মৌলিক ধাতু কাকে বলে? উদাহরণ দাও।

উ: -----

ঘ) ক্রিয়াপদ কাকে বলে? উদাহরণ দাও।

উ: -----

৫। সঠিক উত্তরটিতে ✓ চিহ্ন দাও।

ক) যেসব সংস্কৃত ধাতু ধীরে ধীরে বাংলায় পরিণত হয়েছে তাদের বলা হয়-

i) সাধিত ধাতু ii) যৌগিক ধাতু iii) তদ্ভব ধাতু iv) ধ্বন্যাঙ্ক ধাতু

খ) বাক্যের সবচেয়ে প্রয়োজনীয় অংশ হলো-

i) সমাপিকা ক্রিয়া ii) বিভক্তি iii) প্রত্যয় iv) অসমাপিকা ক্রিয়া

গ) মৌলিক ধাতুর বৈশিষ্ট্য হলো-

i) অব্যয়রূপে ব্যবহৃত হয় ii) নামপদের সঙ্গে আ-প্রত্যয় যোগ করে গঠিত হয়

iii) অসমাপিকা ক্রিয়ার পরে বসে iv) স্বয়ংসিদ্ধ এবং বিশ্লেষণ অসম্ভব

ঘ) মন্তব্য ক : যেকোনো বাক্যের দুটি অংশ উদ্দেশ্য ও বিধেয়।

মন্তব্য খ : বাক্যের বিধেয় অংশটি উদ্দেশ্যে অংশের মতো গুরুত্বপূর্ণ নয়।

i) ক ঠিক খ ভুল ii) ক ভুল খ ঠিক

iii) ক ও খ দুটিই ঠিক iv) ক ও খ দুটিই ভুল

ঙ) ক্রিয়াকে রামমোহন রায় কি নামে অভিহিত করেছিলেন?

i) আবশ্যিক পদ ii) আখ্যাতিক পদ iii) মধুর পদ iv) শীর্ষ পদ

চ) মন্তব্য : 'চল্' একটি মৌলিক ধাতু।

যুক্তি : কারণ একে বিশ্লেষণ করা যায় না।

- i) মন্তব্য ঠিক যুক্তি ভুল ii) মন্তব্য ভুল যুক্তি ঠিক
iii) মন্তব্য যুক্তি উভয়ই ঠিক iv) মন্তব্য যুক্তি উভয়ই ভুল

ছ) বাক্যের উদ্দেশ্যটি সবসময়ই হবে -

- i) অব্যয় পদ ii) বিশেষ্য পদ ও সর্বনাম পদ
iii) ক্রিয়াপদ iv) বিশেষণ পদ

জ) মন্তব্য : "আমি ঘুমাই" - এখানে 'ঘুমাই' হল সক্রমক ক্রিয়া।
যুক্তি : কারণ এই বাক্যের কর্মপদ হল 'আমি'।

- i) মন্তব্য ঠিক যুক্তি ভুল ii) মন্তব্য ভুল যুক্তি ঠিক
iii) মন্তব্য যুক্তি উভয়ই ঠিক iv) মন্তব্য যুক্তি উভয়ই ভুল

ঝ) "সুনিতা খুব গল্প করছে" - এখানে কর্মপদটি হল -

- i) খুব ii) গল্প iii) করছে iv) সুনিতা

ঞ) মন্তব্য ক: সংস্কৃত ভাষায় প্রায় ২০০০ ধাতু আছে কিন্তু ব্যবহৃত ধাতুর সংখ্যা ৭০০ এর বেশি নয়।

মন্তব্য খ: বাংলা ভাষায় ব্যবহৃত ধাতুর সংখ্যা প্রায় ১৫০০ তবে এদের অনেকের ব্যবহার লুপ্ত।

- i) ক ঠিক খ ভুল ii) ক ভুল খ ঠিক
iii) ক ও খ দুটিই ভুল iv) ক ও খ দুটিই ঠিক

[ACTIVITY: 1. পশ্চিমবঙ্গ ও তামিলনাড়ুর যেকোনো দুটি উৎসব চিত্রসহ সংক্ষেপে বর্ণনা কর (৫০ টি শব্দে)।

2. রেখাচিত্রের সাহায্যে ধাতু ও ক্রিয়া পদের ভাগ গুলি চিহ্নিত কর।

**DO THESE TWO ACTIVITIES IN COLOUR A4 PAGE AND PASTE THEM NICELY
IN YOUR BENGALI CLASS WORK COPY]**

D.A.V. MODEL SCHOOL, KSTP, ASANSOL

HOLIDAY HOMEWORK (WORKSHEET - 1)

SESSION: 2024-2025

SUBJECT: MATHEMATICS

CLASS: VIII

Name _____ Roll No: _____ Section: _____

MULTIPLE CHOICE QUESTIONS

- The value of $\sqrt{144} + \sqrt{1.44}$ is ?
 - 24
 - 13.2
 - 1.32
 - none of these
- How many non square numbers are there in between n^2 and $(n + 1)^2$
 - $2n$
 - $4n$
 - $3n$
 - $2n+1$
- Which of the following triplet is a Pythagorean Triplet.
 - (4,5,6)
 - (11,60,61)
 - (10,8,6)
 - both b and c
- The square root of $0.09 + 2 \times 0.21 + 0.49$ is
 - $\sqrt{0.09} + \sqrt{0.49}$
 - $2\sqrt{0.21}$
 - 1
 - 0.58
- Assertion (A) :** Cube Root of 0.000001 is 0.01
Reason (R) : Cubes of all odd natural numbers are odd.
 - A and R both are true and R is the correct explanation for A.
 - A and R both are true but R is not the correct explanation for A.
 - A is true but R is false
 - A is false but R is true

SHORT ANSWER QUESTIONS

- By which smallest number must 5400 be multiplied to make it a perfect cube?
- Prove that if a number is tripled then its cube is 27 times the cube of the gives number?

LONG ANSWER QUESTIONS

8. Three numbers are to one another as 2:3:4. The sum of their cubes is 33957. Find the numbers.

9. By what least number should 3528 be divided so that the quotient is a perfect square?. Find the square root of the quotient so obtained.

COMPETENCY BASED QUESTIONS

10. Ram, a skilled carpenter got an order to make cubical boxes. He was excited to get the order as he really needed some money for his family to celebrate Diwali. In order to buy raw materials for his order, he borrowed Rs. 5000 from a user and bought the required materials. Next day he started his work. He made a cubical box of volume 15625 cm^3 .



Based on the above information answer the following questions :

- What is the cube of an even number given in the story?
- Find the cube root of last three places in 15625 cm^3
- Calculate the edge of given cubical box by estimation method

D.A.V. MODEL SCHOOL, KSTP, ASANSOL
HOLIDAY HOMEWORK (WORKSHEET - 2)
SESSION: 2024-2025

SUBJECT: MATHEMATICS

CLASS: VIII

Name _____ Roll No: _____ Section: _____

MULTIPLE CHOICE QUESTIONS

1. Which of the following is not a perfect square?

a) 62500 b) 57600 c) 90000 d) 63147

2. The number of zeros in the cube of 1000

a) 2 b) 4 c) 9 d) 10

3. Given that $\sqrt[3]{512} = 8$, $\sqrt[3]{3.375} = 1.53$, find the value of $\sqrt[3]{512} \times \sqrt[3]{3.375}$

a) 12 b) 9.5 c) 8 d) 1.5

4. Which of the following is the square root of 7056?

a) 86 b) 34 c) 54 d) 84

5. **Assertion(A)** : There are 10 natural numbers lie between 5^2 and 6^2 .

Reason(R) : The difference between the squares of two consecutive natural numbers is equal to their sum.

- a) A and R both are true and R is the correct explanation for A.
- b) A and R both are true but R is not the correct explanation for A.
- c) A is true but R is false
- d) A is false but R is true

SHORT ANSWER QUESTIONS

6. Find the cube root of 175616 by estimation.

7. Find the square root of each of the following by long division method :

i) 97344 ii) 120409

LONG ANSWER QUESTIONS

8. Find the greatest 6 - digit number which is a perfect square?

9. The Cost of levelling a square lawn at rupees 15 per square meter is Rs 19,935. Find the cost of fencing the lawn at 22 per meter.

COMPETENCY BASED QUESTIONS

10. The area of a rectangle and a square is equal. The length and the breadth of rectangle are 343 cm and 63 cm respectively.

- a) Find the area of the rectangle.
- b) Find the length of the side of the square.
- c) Find the Perimeter of Square.

DAV MODEL SCHOOL, KSTP, ASANSOL
HOLIDAY HOMEWORK
SESSION : 2024-25

CLASS : VIII
SUBJECT:SCIENCE

Q1. Which of the following are prokaryotes?

- | | | | |
|-------------|---------------------|------------|-------------|
| A. Protozoa | B. Blue-green algae | C. Fungi | D. Bacteria |
| a) A and B | b) B and C | c) A and D | d) B and D |

Q.2 Normal force is an example of—

- a) Contact force b) Non-contact force c) Balance force d) All of them

Q3 The slow process of conversion of dead vegetation into coal is called-

- a)Decomposition b) evolution c) photosynthesis d) carbonization

Q4. Which of the following is in descending order of the quality of coal?

- a)Peat>bituminous>lignite>anthracite
b)Bituminous>peat>lignite>anthracite
c)Anthracite>bituminous>lignite>peat
d)Lignite>anthracite>bituminous>peat

Q5LAW OF INERTIA is also known as_____

- a)Newton's 1st law b) law of Galileo c) Aristotle Fallacy d) Galileo's law of odd numbers.

- i. Option (a) and (b) are correct
ii. Option (b) & (d) are correct
iii. Option (c) & (a) are correct
iv. All are correct

Q6. All the living matter in a cell is called _____.

- | | | | |
|--------------|---------------|--------------|-------------|
| a) Endoplasm | b) Protoplasm | c) Cytoplasm | d) Cell sap |
|--------------|---------------|--------------|-------------|

Q7. . Which of the following of the following have cell walls?

- | | | | |
|--------------------|--------------------|-------------------|---------------|
| A. Epidermal cells | B. Epithelial cell | C. Mesophyll cell | D. Liver cell |
| a) A and B | b) B and C | c) A and C | d) B and D |

Q8-Q10 are Assertion-and-Reason Type

Each question consists of two statements, namely, Assertion (A) and Reason (R).For selecting the correct answer, use the following code:

- (a) Both Assertion (A) and Reason (R) are the true and Reason (R) is a correct explanation of Assertion (A).
(b) Both Assertion (A) and Reason (R) are the true but Reason (R) is not a correct explanation of Assertion (A).
(c) Assertion (A) is true and Reason (R) is false.
(d) Assertion (A) is false and Reason (R) is true.

Q8. **Assertion** : Amoeba changes its shape continuously. **Reason** : Amoeba changes its shape due to formation of pseudopodia.

Q9. **Assertion** : Coal , petroleum and natural gas can be prepared in the laboratory from dead organisms.

Reason : They cannot be prepared in laboratory as their formation is a very slow process and conditions for their formation cannot be created in the laboratory.

Q10. **Assertion** : Pulling a lawn roller is easier than pushing it. **Reason** : Pulling increases the apparent weight and hence the force of friction.

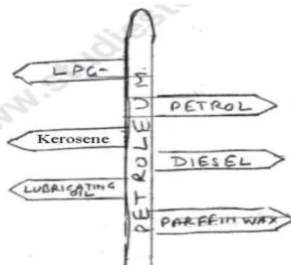
Q11-Q15 are short questions and needs to be written in 20-30 words.

Q11. State the structure and function of the organelle that contains “the unit of heredity”.

Q12. Differentiate between the two types of Endoplasmic Reiculum.

Q.13. Why it is easier to walk on soft sand if we have a flat shoes rather than shoes with sharp heels (or pencil heels)?

Q.14 Constituents of petroleum are shown in figure below. Write one use of each constituent.



i) _____

ii) _____

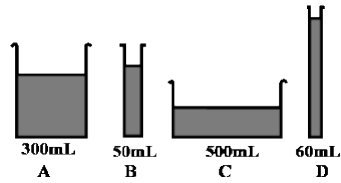
iii) _____

iv) _____

v) _____

vi) _____

Q.15. Observe the vessels A, B, C, and D shown in Fig. carefully. Volume of water taken in each vessel is as shown. Arrange them in the order of decreasing pressure at the base of each vessel



Q16. The cytoplasm of the cells of a tomato plant contains organelles X having different pigments which impart different colours to the leaves of the tomato plant and its fruits.

a) What is the general name of the organelles X?

b) What is the (i) name (ii) colour and (iii) function of organelle X present in the leaves of tomato plant?

c) What is the colour of organelles X which are present in the ripe fruits of tomato plant?

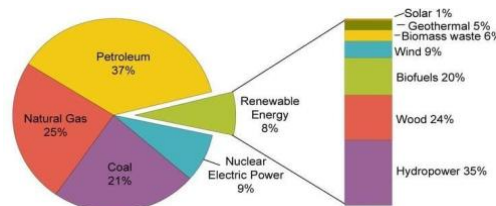
Q17. a) What is atmospheric pressure?

b) Two rods A & B having same weight and equal length have different thickness. Rod A is thinner while Rod B is thicker. They are held vertically on the surface of sand. Which one of them will sink more and why?

c) A force of 100 N is applied on an area of 2m x 2m. Compute pressure being applied on the area.

Q18. Differentiate between renewable and non-renewable source of energy with examples.

Q19. **This** is a pie chart about energy sources in country X in the year 2015. Examine it and answer the following questions:



- a) What percentage of fossil fuels did the country X consume that year?

- b) Do you find that renewable sources played an important role in the country? Why?

- c) Mention the names of fossil fuels used by this country?

- d) Which fossil fuel used by country X is a clean fuel?

Q.20. 1) A brick is 30 cm long , 10 cm wide and 10 cm thick. It weighs 24 N and is lying on the ground . Find the pressure exerted by the brick on the ground.

2. A force of 300 N , while acting on an area A, produces a pressure of 1500 Pa. Calculate the magnitude of area A.

DAV MODEL SCHOOL, KSTP, ASANSOL
HOLIDAY HOMEWORK, 2024-25
CLASS – VIII SUBJECT – SOCIAL SCIENCE
WORKSHEET – 1

NAME: _____ Sec: ____ Roll No.: _____ Adm. NO. _____

1. Fill in the blanks

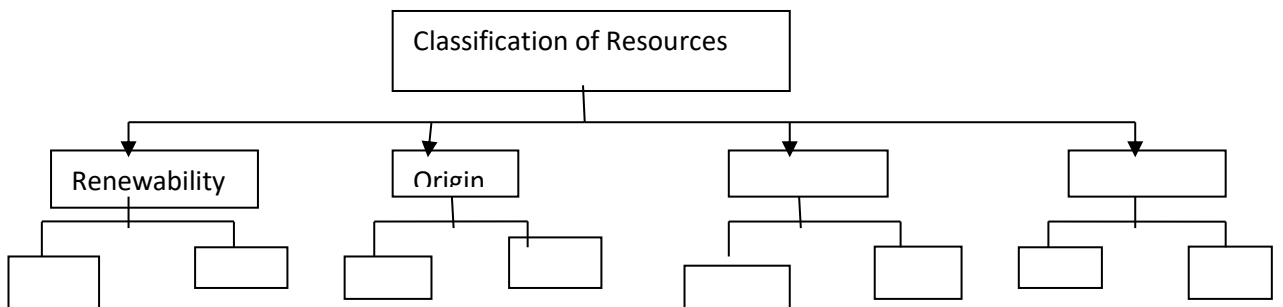
- a) Human needs and wants are neither _____ in all parts of the world nor _____ over the years.
- b) Resources should be utilised _____ so that after fulfilling our present requirements, they are conserved for future generations
- c) The _____ reforms were introduced in 1909.
- d) India has a single _____ judicial system
- e) England is not a republic because its Head of the State is _____.

2. Answer the following questions:

- a) Why are human needs neither uniform nor static all over the world?

Ans. _____

3. Complete the given flow chart



4. Explain the major sources of information about Modern Indian History.

Ans. _____

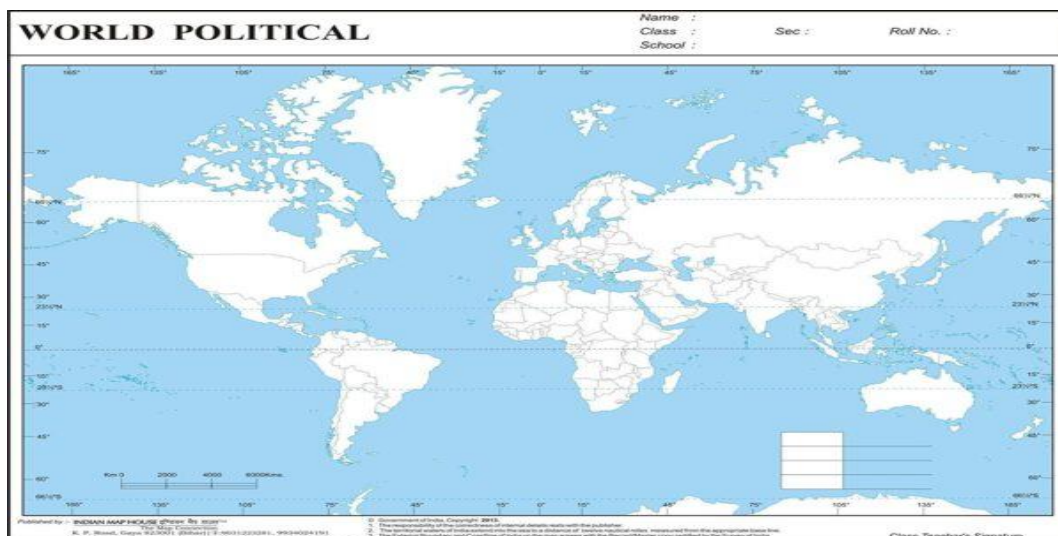
5. Explain the different procedures of amendment of Indian Constitution.

Ans. _____

6. Explain the basic features of our Constitution.

Ans. _____

1. On outline political map of world mark the following
 - a) Developing country in Asia
 - b) Developing country in Africa
 - c) 2 developed countries



DAV MODEL SCHOOL, KSTP, ASANSOL
HOLIDAY HOMEWORK, 2024-25
CLASS – VIII SUBJECT – SOCIAL SCIENCE
WORKSHEET – 2

NAME: _____ Sec: ____ Roll No.: _____ Adm NO. _____

1. Multiple choice questions

A) Which one is not a non-renewable resource?

- a) Coal b) Petroleum c) Solar energy d) natural gas

B) Human beings are using water for _

- a) Generating electricity b) irrigation c) navigation d) all the above

C) Freedom of religion makes India a _

- a) Socialist State b) Sovereign State c) Secular State d) Republic

D) In which language was the newspaper ‘Kesari’ published?

- a) Hindi b) Gujarati c) Marathi d) Urdu

E) The book Unhappy Indian was written by-

- a) Bankim Chandra b) Bal Gangadhar Tilak c) Sarojini Naidu d) Lala Lajpat Rai

2. Utility and value of a resource varies from time to time and place to place, explain.

Ans. _____

3. Note down the name of some freedom fighters who helped India to become Independent and also write down slogan in front of the names if any slogan was given by them.

Ans. _____

4. Match the following

Column A	Column B
You give me blood I shall give you freedom	Source of information about Modern period
Kesari	Lala Lajpat Rai
Un happy Indian	Marathi newspaper
Administrative reports of government	Subhash Chandra Bose

5. Differentiate between rigid and flexible constitution.

Ans. _____

6. Mention some challenges which our country is facing in fulfilling the provisions mentioned in our constitution.

Ans. _____

7. On an outline political map of the world, locate the following countries from whom India adopted varied features enshrined in our Constitution.

WORLD POLITICAL

Name : _____
 Class : _____ Sec : _____ Roll No. : _____
 School : _____

Published by - INDIAN MAP HOUSE (Pvt.) Ltd. 2013
 K. P. Road, Gurgaon (Haryana) - 122001 (India) | E-mail: info@indianmaphouse.com | Web: www.indianmaphouse.com
 © Government of India, Copyright 2013
 1. The responsibility of the correctness of internal details rests with the publisher.
 2. The territorial waters of India extend into the sea to a distance of twelve nautical miles, measured from the appropriate base line.
 The External Boundary and Coastline of India on the map agrees with the Revised Master copy verified by the Survey of India.

Class Teacher's Signature _____

D.A.V. MODEL SCHOOL, KSTP, ASANSOL
HOLIDAY HOME WORK (SUMMER VACATION)
SESSION: 2023-2024
WORK SHEET NO.:-1

SUBJECT: SANSKRIT

CLASS: VIII

Name _____ Roll No: _____ Section: _____

1. अधोलिखितम् पद्यांशं पठित्वा प्रश्नानाम् उत्तराणि लिखत -

पापान्निवारयति योजयते हिताय,

गुह्यं निगूहति गुणान्प्रकटीकरोति।

आपद्गतं च न जहाति ददाति काले,

सन्मित्रलक्षणमिदं प्रवदन्ति सन्तः।

(अ) एकपदेन उत्तरत-

(i) सन्मित्रं कस्मात् निवारयति?

उ:

(ii) सन्मित्रं कान् प्रकटयति?

उ:

(आ) पूर्णवाक्येन उत्तरत-

(i) सन्तः कस्य इदं लक्षणं प्रवदन्ति?

उ:

(ii) सन्मित्रं किं निगूहति?

उ:

(इ) विस्तारेण लिखत -

(i) सन्मित्रः कथं सहयोगं यच्छति?

उः

2. अधोलिखितम् प्रदत्तप्रश्नानाम् उत्तराणि संस्कृतेन लिखत-

क) एकपदेन उत्तरत-

(i) काकः चटकाः च के स्तः?

उः

(ii) उदारचरितानां जनानां कुटुम्बकम् किं भवति?

उः

ख) पूर्णवाक्येन उत्तरत-

(i) एकदा भीषणे ग्रीष्मकाले किम् अभवत्?

उः

(ii) चटका कीदृशं गृहम् अरचयत्?

उः

3. अभिमानी काकः चटकाः किम् अकथयत्?

उः

_।

4. अधोलिखितवाक्येषु उपसर्गयुक्तानि पदानि रेखाङ्कितानि कृत्वा उपसर्गान् पृथक् कृत्वा लिखन्तु-

(i) बालकाः यत् पठन्ति तत् विस्मरन्ति।

उः

(ii) नृपः सेवकान् निर्दिशति।

उः

(iii) छात्रः पाठस्य अभ्यासम् करोति।

उः

5. मञ्जूषातः उचितानि अव्ययपदानि चित्वा रिक्तस्थानानि पूरयन्तु-

(i) _____ विवादेन।

(ii) त्वम् _____ पठसि?

(iii) सिंहः _____ गर्जति।

मञ्जूषाः - कुत्र, उच्चैः, अलम्।

6. उचितपदानि चित्वा वाक्यानि पूरयन्तु-

(i) पुष्पाणि _____ आनय। (चि+क्त्वा)

(क) चीत्वा (ख) चित्वा (ग) चयित्वा

(ii) सः _____ कथयति। (हस्+ क्त्वा)

(क) हसित्वा (ख) हत्वा (ग) हसीत्वा

7. विकल्पेभ्यः उचितं धातुरूपं चित्वा वाक्येषु रिक्तस्थानानि पूरयत-

(क) त्वम् शीघ्रं कार्यं _____।

(i) करोतु (ii) कुरु (iii) कुरुताम् (iv) कुर्मः

(ख) सर्वे छात्राः प्रश्नपत्राणि पठित्वा उत्तराणि _____।

(i) लिखामि (ii) लिखसि (iii) लिखति (iv) लिखन्ति

8. अधोलिखितं अनुच्छेदं पठित्वा प्रश्नानाम् उत्तराणि लिखत -

सायंकालः भवति। सूर्यः तु अस्तं गच्छति। खगाः स्वनीडानि गच्छन्ति। कमलानि म्लानानि भवन्ति कुमुदानि च विकसन्ति। सर्वे जनाः स्वगृहम् आगच्छन्ति। रात्रौ उलूकाः इतस्ततः भ्रमन्ति। पथिकाः विश्रामाय तिष्ठन्ति। बालकाः क्रीडाक्षेत्रात् स्वं गृहम् आगच्छन्ति। गृहम् आगत्य विविधान् आहारान् खादन्ति। रात्रौ सर्वत्र अन्धकारस्य राज्यम् भवति।

(अ) एकपदेन उत्तरत-

(i) के स्वनीडानि गच्छन्ति? (खगाः/उलूकाः/पथिकाः)

उः

(ii) कानि म्लानानि भवन्ति? (कुमुदानि/कमलानि/पुष्पाणि)

उः

2. पूर्णवाक्येन उत्तरत-

(i) बालकाः कुतः गृहम् आगच्छन्ति?

उः

(ii) रात्रौ उलूकाः कुत्र भ्रमन्ति?

उः

9. 'ते विविधान् आहारान् खादन्ति' इति वाक्ये 'विविधान्' इति विशेषणपदस्य विशेष्यपदं किम्?

उः

10. अवकाशहेतोः प्रधानाचार्य प्रति एकं प्रार्थना पत्रं लिखितम् अस्ति। मञ्जूषातः समुचितं पदं चित्वा रिक्तस्थानानि पूरयन्तु-

4/10, जयदेव पार्क

दिल्ली - 26

_____ : 16/4/2024

सेवायाम्,

मान्याः प्रधानाचार्यः,

डी.ए.वी. विद्यालयः

चेन्नई नगरम्।

आदरणीयाः महोदयाः,

सविनयं _____ अस्ति यद् अहं _____ ग्रस्तः अस्मि। अतः पाठशालाम् आगन्तुं न शक्नोमि। तदर्थम् आगामिनः _____ अवकाशः प्रदीयताम् इति प्रार्थये।

_____ आज्ञाकारी शिष्यः

प्रवीण कुमारः

अनुक्रमाङ्कः

अष्टमी कक्षा

मञ्जूषा: - भवताम्, निवेदनम्, ज्वरेण, दिनद्वयस्य, दिनाङ्कः ।

D.A.V. MODEL SCHOOL, KSTP, ASANSOL
HOLIDAY HOMEWORK (SUMMER VACATION)
SESSION: 2024-2025
WORK SHEET NO.:- 1

SUBJECT: HINDI (3rd Language)

CLASS: VIII

Name: _____ **Roll No.:** _____ **Section:** _____

1) प्रस्तुत गद्यांश को पढ़कर पूछे गए प्रश्नों के उत्तर लिखिए।

बढ़ती जनसंख्या ने अनेक प्रकार की समस्याओं को जन्म दिया है जैसे रोटी, कपड़ा, मकान की कमी, बेरोजगारी, निरक्षता, कृषि एवं उद्योगों के उत्पादनों में कमी आदि। हम जितनी अधिक उन्नति करते हैं या विकास करते हैं, जनसंख्या उसके अनुपात में बढ़ती जाती है। बढ़ती जनसंख्या के समक्ष हमारा विकास बहुत कम रह जाता है इसलिए विकास कार्य दिखाई नहीं देते। बढ़ती जनसंख्या के समक्ष सभी सरकारी प्रयास असफल दिखाई देते हैं। कृषि उत्पादन और औद्योगिक विकास बढ़ती जनसंख्या के सामने नगण्य सिद्ध हो रहे हैं। इन सभी बातों को ध्यान में रखते हुए जनसंख्या वृद्धि पर नियंत्रण की अति आवश्यकता है। इसके बिना विकास के लिए किए गए सभी प्रकार के प्रयत्न अधूरे रह जाएँगे।

क) बढ़ती जनसंख्या ने किस प्रकार की समस्याओं को जन्म दिया है?

ख) विकास कार्य क्यों नहीं दिखाई देते?

ग) बढ़ती जनसंख्या के सामने कौन से प्रयास असफल दिखाई देते हैं?

घ) 'नगण्य' शब्द का सही अर्थ क्या है?

ङ) कौन से कार्य बढ़ती जनसंख्या के सामने नगण्य सिद्ध हो रहे हैं?

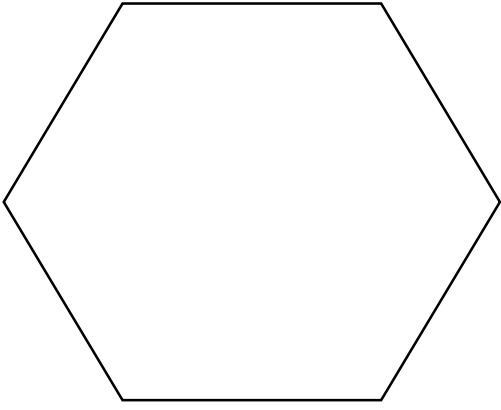
2) निम्नलिखित शब्दों के विलोम शब्द लिखिए-

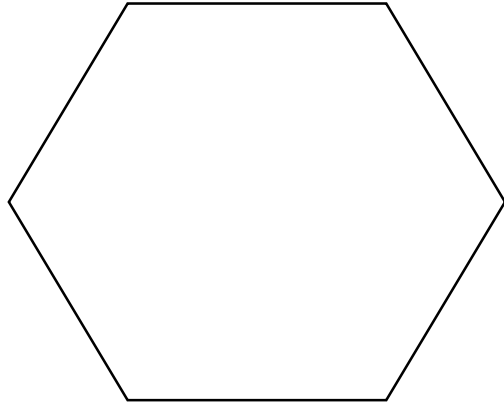
क) आकाश - _____ ख) स्वीकार - _____

3) निम्नलिखित शब्दों के वचन बदलकर लिखिए-

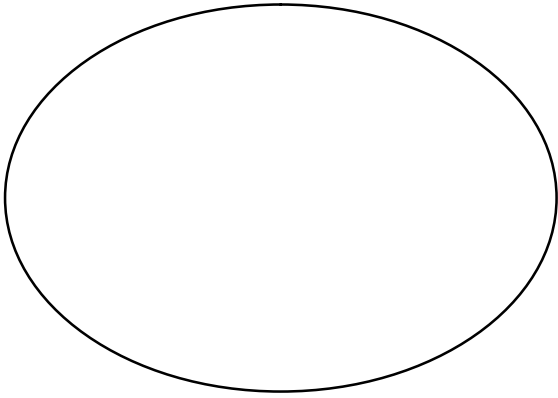
क) मक्का - _____ ख) आँख - _____ ग) लकड़ी - _____

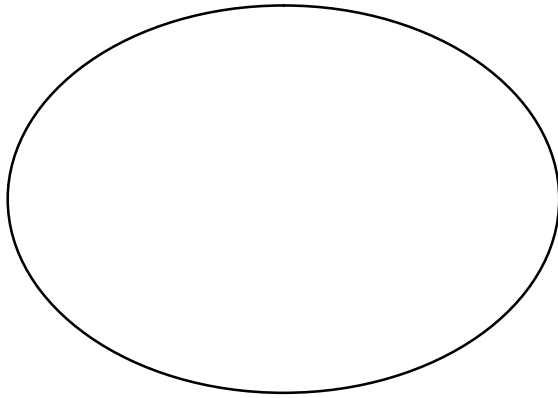
4) स्त और क्श संयुक्त व्यंजन वाले एक-एक शब्द लिखिए और उसका चित्र बनाइए।





5) एक जातिवाचक और एक व्यक्तिवाचक संज्ञा शब्द लिखकर उसका चित्र बनाइए।





6) निम्नलिखित प्रश्नों के उत्तर 20-25 शब्दों में लिखिए :-

i) अगर होजा नहीं होता, तो क्या होता?

ii) सरदार पटेल की तीन विशेषताएँ लिखिए।

D.A.V. MODEL SCHOOL, KSTP, ASANSOL
HOLIDAY HOMEWORK (SUMMER VACATION)
SESSION: 2024-2025
WORK SHEET NO.:- 2

SUBJECT: HINDI (3rd Language)

CLASS: VIII

Name: _____ **Roll No.:** _____ **Section:** _____

1) प्रस्तुत गद्यांश को पढ़कर पूछे गए प्रश्नों के सही विकल्प चुनकर उसपर निशान लगाइए।

संसार में सबसे मूल्यवान वस्तु समय है क्योंकि दुनिया की अधिकांश वस्तुओं को घटाया-बढ़ाया जा सकता है, पर समय का एक क्षण भी बढ़ा पाना व्यक्ति के बस में नहीं है। समय के बीत जाने पर व्यक्ति के पास पछतावे के अलावा कुछ नहीं होता। विद्यार्थी के लिए तो समय का और भी अधिक महत्त्व है। विद्यार्थी जीवन का उद्देश्य है शिक्षा प्राप्त करना। समय के उपयोग से ही शिक्षा प्राप्त की जा सकती है। जो विद्यार्थी अपना बहुमूल्य समय खेल-कूद, मौज-मस्ती तथा आलस्य में खो देते हैं वे जीवन भर पछताते रहते हैं, क्योंकि वे अच्छी शिक्षा प्राप्त करने से वंचित रह जाते हैं और जीवन में उन्नति नहीं कर पाते। मनुष्य का कर्तव्य है कि जो क्षण बीत गए हैं, उनकी चिंता करने के बजाय जो अब हमारे सामने हैं, उसका सदुपयोग करें।

(क) समय को सबसे अमूल्य वस्तु क्यों कहा गया है?

- (i) इसका एक क्षण भी घटाया-बढ़ाया नहीं जा सकता।
- (ii) समय व्यक्ति के वश में है।
- (iii) समय ही व्यक्ति के जीवन को नहीं बदल सकता है।
- (iv) मनुष्य उस समय की गति को रोक सकता।

(ख) विद्यार्थी जीवन का उद्देश्य क्या है?

- (i) जीवन को सुखी बनाना
- (ii) गुरुओं का आदेश न मानना
- (iii) हमेशा खेल-कूद करना
- (iv) शिक्षा प्राप्त करना

(ग) विद्यार्थी जीवन भर क्यों पछताते रहते हैं?

- (i) क्योंकि वे बहुत मेहनती होते हैं।
- (ii) वे कीमती समय मौज मस्ती करने में बिताते हैं।
- (iii) वे हमेशा ज्ञान प्राप्त करने में लगे रहते हैं।
- (iv) वे अपने लक्ष्य प्राप्ति में लगे रहते हैं।

(घ) समय के संबंध में व्यक्ति का क्या कर्तव्य बताया गया है?

- (i) परिश्रम करें।
- (ii) मन लगाकर पढ़ाई करें।
- (iii) बीते समय के बारे में पश्चाताप न करके वर्तमान समय का सदुपयोग करें।
- (iv) असफल होने पर निराश न हों, पुनः प्रयास करें।

(ड) उपर्युक्त गद्यांश का उपयुक्त शीर्षक चुनिये।

- (i) समय का सदुपयोग (ii) समय और मनुष्य
(iii) विद्यार्थी और समय (iv) अमूल्य समय

2) निम्नलिखित प्रश्नों के उत्तर 20-25 शब्दों में लिखिए :-

i) पेड़ हमारे मित्र हैं, कैसे?

ii) हमें अपने भय पर नियंत्रण रखने के लिए क्या-क्या करना चाहिए?

3) निम्नलिखित प्रश्नों के उत्तर 30-35 शब्दों में लिखिए :-

i) हमें कठिन परिस्थिति में समझदारी और बुद्धिमानी से काम लेना चाहिए, क्यों?

ii) यदि प्रत्येक भारतीय सच्चा देशभक्त बनकर राष्ट्र की उन्नति के लिए काम करे, तो क्या होगा?

4) दंतमंजन का एक आकर्षक विज्ञापन तैयार कीजिए-