

CLASS II QUESTION BANK



1. Identify the name of the given pictures:
  - a. Newspaper
  - b. Magazine
  - c. Calendar
  - d. Book
  
2. Which is the special book that gives us the meaning of words?
  - a. Dictionary
  - b. Textbook
  - c. Comics
  - d. Diary
  
3. Tick and write the describing word from the sentence given below:  
**Yesterday, I visited a dark cave.**
  - a. Yesterday
  - b. I
  - c. Dark
  - d. Visited
  
4. If there are 5 vowels in Alphabets then how many Consonants are there?
  - a. 21
  - b. 26
  - c. 16
  - d. 30
  
5. The opposites of full is \_\_\_\_\_ ?
  - a. Blank
  - b. Empty
  - c. Incomplete
  - d. Half
  
6. Complete the following question:-  
 \_\_\_\_\_ **do you get up?**
  - a. Where
  - b. Why
  - c. What
  - d. When
  
7. Complete the following sentence:-  
**A \_\_\_\_\_ of elephants is drinking**  
 water.
  - a. Bunch
  - b. Pack
  - c. Herd
  - d. Fleet.
  
8. Shalu is cute. What is shalu in the sentence?
  - a. Adjective
  - b. Verb
  - c. Noun
  
- d. Pronoun
  
9. The plural of hair is \_\_\_\_\_?
  - a. Hairs
  - b. Hair
  - c. Heir
  - d. Hear
  
10. I enjoy \_\_\_\_\_ photographs of my friends
  - a. Take
  - b. Took
  - c. Taking
  - d. Taked
  
11. Encircle the sentence with correct order.
  - a. The football match begins at 80'clock.
  - b. The begins match football 8o'clock at.
  - c. 8o'clock the football match begins.
  - d. Match the football begins at 8o'clock.
  
12. Choose the correct spelling:
  - a. Habet
  - b. Habit
  - c. Habiit
  - d. Habeet
  
13. Choose the rhyming word for Yummy.
  - a. Tasty
  - b. Mummy
  - c. Funny
  - d. Many
  
14. What is the young one of a frog called?
  - a. Colt
  - b. Cub
  - c. Gosling
  - d. Tadpole
  
15. The book was \_\_\_\_\_ the table.
  - a. At
  - b. In
  - c. On
  - d. of
  
16. She \_\_\_\_\_ tennis daily.
  - a. Play
  - b. Plays
  - c. Playing
  - d. were playing
  
17. "\_\_\_\_\_ is she?" "She's my friend from London"
  - a. Who
  - b. What

- c. Why  
d. Where
18. \_\_\_\_\_ lots of animals in the zoo.  
a. There is  
b. There are  
c. There were  
d. There
19. Tick the correct spelling:  
a. Puzzel  
b. Pluzze  
c. Puzzle  
d. Pazal
20. The opposite of dwarf is \_\_\_\_\_ .  
a. Mini  
b. Giant  
c. Small  
d. Short
21. Who has written the National song of India?  
a. Bankim Chandra Chattopadhyay  
b. Rabindranath Tagore\  
c. Maharishi Valmiki  
d. Mahatma Gandhi
22. Which country is called the land of the rising sun?  
a. Japan  
b. Australia  
c. China  
d. Russia
23. How many colours are there in Rainbow ?  
a. 7  
b. 9  
c. 6  
d. 5
24. How do you relate to your maternal grandfather?  
a. Mother's father  
b. Mother's sister  
c. Father's father  
d. Father's mother
25. The world's tallest animal is:-  
a. Horse  
b. Giraffe  
c. Leopard  
d. Ostrich
26. Which is the smallest country in the world:-  
a. Australia  
b. Japan  
c. Vatican City  
d. Argentina
27. Which is the highest mountain peak in the world:-  
a. Kanchenjunga  
b. Lhotse  
c. K2  
d. Mount Everest
28. Which is the tallest building in the world:-  
a. Dubai Burj Khalifa  
b. Shanghai Tower  
c. Kingdom Clock Tower  
d. Lotte World Tower
29. Which is the biggest and deepest ocean:-  
a. Pacific Ocean  
b. Arctic Ocean  
c. Indian Ocean  
d. Atlantic Ocean
30. Which planet is closest to the sun:-  
a. Earth  
b. Mars  
c. Mercury  
d. Jupiter
31. Fattest bird in the world is:-  
a. Parrot  
b. Swift  
c. Owl  
d. Penguin
32. Which is the longest river in the world?  
a. Ganga  
b. Nile  
c. Brahmputra  
d. Yamuna
33. Which of the following is not a part of computer?  
a. Mouse  
b. Rat  
c. Monitor  
d. CPU
34. A computer company by the name of a fruit:  
a. Apple  
b. Grapes  
c. Mango  
d. Banana
35. VISHWANTH ANAND is associated with which Sport?  
a. Chess  
b. Carom  
c. Squash  
d. Cricket

36. **Arjun** award is related to which field?

- Film
- Sports
- Literature
- Medicine

37. What is the study of Stars called?

- Physics
- Astronomy
- Chemistry
- Anatomy

38. How do you keep your bones and muscles healthy?

- Eating bad food
- Exercising
- Oxygen
- Watch T.V.

39. From which creature do we get Pearls?

- Fish
- Oyster
- Whale
- Shark

40. How many months end with the letters "ber"?

- 1
- 2
- 4
- 6

41. बुधवार के बाद क्या आता है ?

- शुक्रवार
- शनिवार
- बृहस्पतिवार
- मंगलवार

42. रेखांकित शब्द का विलोम शब्द लिखकर वाक्य पूरा करें।

मुझे जाना तो अंदर था पर मैं \_\_\_\_\_  
निकल गया।

- बहार
- बाहर
- बारह
- बराह

43. साल के छठे माह का नाम बताइये।

- जून
- जुलाई
- मई

4. अगस्त

नीचे दिए गए शब्द के समानार्थी शब्द पर सही का निशान

लगाएँ:-

44. विश्वास

- भरोसा
- विकास
- आराम
- सहारा

45. दिए गए वर्णों को पूरा करें:-

त \_\_\_\_\_ द \_\_\_\_\_ न

- क, ग
- य, र
- थ, ध
- प, फ

46. दिशाएँ कितनी होती हैं?

- चार
- छः
- पाँच
- आठ

47. बाल दिवस कब मनाया जाता है ?

- 2 नवम्बर को
- 5 सितम्बर को
- 14 नवम्बर को
- 29 मई को

48. अकबर और बीरबल की कहानी में राजा कौन है?

- अकबर
- बीरबल
- शाहजहां
- चन्द्रगुप्त

49. स्वतंत्रता दिवस कब मनाया जाता है?

1. 26 जनवरी
2. 8 अगस्त
3. 15 अगस्त
4. 7 अगस्त

50. रोहन और समीरा स्कूल जा रहे हैं।  
इस वाक्य में नाम वाले शब्द हैं

1. रोहन, समीरा
2. रोहन
3. रोहन, समीरा, स्कूल
4. समीरा

51. कहानी के नाम को पूरा कीजिये।  
अलीबाबा और \_\_\_\_\_

1. चालीस चोर
2. बीस चोर
3. चोरों का चोर
4. एक चोर

52. कौन का सामान लय वाला शब्द है

1. मुन
2. मोन
3. मनो
4. मौन

अनेक शब्दों के लिए एक शब्द बताइये:-

53. रंगों का त्योहार

1. होली
2. दिवाली
3. रक्षा बंधन
4. ईद

54. एक तार का बाजा

1. तबला
2. सितार
3. एकतारा
4. शहनाई

55. शुद्ध रूप बताएँ

1. विस्वास
2. विश्वास
3. विषहवास
4. विष्वास

56. वाक्य पूरा करें :-

सोहन रोज बाग में \_\_\_\_\_

1. जाता है
2. जाती है
3. जा रहें हैं
4. चले गए थे

57. In 289, the place value of 8 is \_\_\_\_\_.

- a. Ones
- b. Hundreds
- c. Tens
- d. Thousands

58. Three hundred and one can be written as \_\_\_\_\_.

- a. 31
- b. 310
- c. 301
- d. 3001

59. 232, 242, \_\_\_\_\_, 262. The missing number in the pattern is \_\_\_\_\_.

- a. 222
- b. 225
- c. 252
- d. 243

60.  $10+43+34=$

- a. 87
- b. 77
- c. 104334
- d. 197

61. There are 3 sweets in one packet. How many sweets will be there in 9 packets?

- a. 12
- b. 27
- c. 9
- d. 3

62. \_\_\_\_\_ is 200 more than 546.

- a. 346
- b. 446
- c. 646
- d. 746

63. There are 4 apples in each basket. How many apples will be there in 5 baskets?

- a. 5
- b. 20
- c. 9
- d. 10

64. Which numbers are in proper descending order?

- a. 57,49,40,32,23,25
- b. 83,68,56,59,38,29
- c. 97,88,76,67,48,39
- d. 76,53,64,59,22,17

65. Which sum is maximum?

- a.  $18 + 38$
- b.  $23 + 29$
- c.  $33 + 19$
- d.  $28 + 27$

66. Which difference is minimum?

- a.  $29 - 14$
- b.  $33 - 19$
- c.  $39 - 27$
- d.  $35 - 17$

67. Complete the number pattern.

6, 12, 18, 24, 30, \_\_\_\_\_

- a. 36
- b. 38
- c. 39
- d. 41

68. How many straight lines are needed to make the given figure?



- a. 10
- b. 9
- c. 15
- d. 12

69. Largest two digit number is

- a. 99
- b. 10
- c. 55
- d. 88

70. While counting backward,eleventh alphabet is

- a. O
- b. P
- c. R
- d. Q

71. Find the wrong statement

- a. A leap year has exactly 366 days
- b. In a leap year February has exactly 29 days
- c. Six months in a year have 31 days each
- d. One week has exactly 7 days.

72. Find the wrong number in the following series.

19, 28, 37, 45,55,64,73

- a. 73
- b. 55
- c. 45
- d. 28

73. Which of the following expressions is true?






- a.  $86 > 86$
- b.  $90 < 99$
- c.  $21 = 12$
- d.  $65 > 75$

74. One more than smallest two digit number is

- a. 12
- b. 11
- c. 13
- d. 10

Study the graph and answer (Q-75-78)

Aditya decided to conduct a study on most popular car color. So he stood outside his house and recorded the observation about 50 cars passed from there. This was what he observed.

Car Color	Number of cars
Red Car 	16
Green Car 	12
Blue Car 	5
Black Car 	4
Orange Car 	13

Now, read the above table and answer the following questions:

75. How many cars did Aditya count?

- a. 50
- b. 30
- c. 55
- d. 45

76. How many blue cars did Aditya count?

- a. 5
- b. 13
- c. 3
- d. 10

77. How many green cars did Aditya count?  
a. 12  
b. 15  
c. 13  
d. 5
78. What is the most popular color car according to his observation?  
a. Red Car  
b. Blue car  
c. Green Car  
d. Yellow Car
79. Tick the number that comes just before 300  
a. 299  
b. 301  
c. 311  
d. 133
80. In a pond, there are 142 goldfish and 157 black fish. How many less goldfish than black fish are there in the pond?  
a. 18  
b. 15  
c. 16  
d. 7
81. Organ that helps us to taste food is \_\_\_\_\_.  
a. Teeth  
b. Tongue  
c. Skin  
d. Hand
82. Mountain climbers often carry \_\_\_\_\_ with them.  
a. Tents  
b. Igloos  
c. Boats  
d. Wheels
83. \_\_\_\_\_ usually grows under the ground.  
a. Stem  
b. Flowers  
c. Branches  
d. Roots
84. We should not share our \_\_\_\_\_ to avoid infection.  
a. Clothes  
b. Pants  
c. Handkerchief  
d. t-shirt
85. \_\_\_\_\_ is the fastest method to withdraw money.  
a. AMT  
b. MAT  
c. TAM  
d. ATM
86. \_\_\_\_\_ live both on land and in water.  
a. Alligator  
b. Lizard  
c. Cockroach  
d. Fish
87. We have \_\_\_\_\_ National Festivals.  
a. Two  
b. Three  
c. Four  
d. Seven
88. \_\_\_\_\_ is a large water body on Earth.  
a. River  
b. Lake  
c. Sea  
d. Pond
89. \_\_\_\_\_ has big leaves.  
a. Mango  
b. Banana  
c. Apple  
d. Lemon
90. Air vehicles form \_\_\_\_\_  
a. Waterways  
b. Railways  
c. Airways  
d. Roadways
91. A person who weaves clothes is known as a \_\_\_\_\_.  
a. Tailor  
b. Barber  
c. Shopkeeper  
d. Weaver
92. A fruit which has the same name as a color is \_\_\_\_\_.  
a. Orange  
b. Mango  
c. Grapes  
d. Banana

93. Sarso da saag is the famous dish of \_\_\_\_\_.

- a. Gujrat
- b. Madras
- c. Delhi
- d. Punjab

94. \_\_\_\_\_ is known as the father of Nation.

- a. Mahatma Gandhi
- b. Narendra Modi
- c. Rajiv Gandhi
- d. Sardar Vallabhbai Patel

95. We see a rainbow in the sky in \_\_\_\_\_ season.

- a. Summer
- b. Rainy
- c. Winter
- d. Autumn

96. Which of the following vehicles move with a siren?

- a. Ambulance
- b. Car
- c. Scooter
- d. Bus

97. Which of the following things cannot be observed at night?

- a. Owl
- b. Stars
- c. Sun
- d. Moon

98. Which festival brings gifts and Santa Claus?

- a. Holi
- b. Christmas
- c. Gandhi Jayanti
- d. Bhai Duj

99. The national aquatic animal of India is \_\_\_\_\_

- a. Crocodile
- b. River Dolphin
- c. Fish
- d. Frog

100. Which is the Science of maintaining good health through cleanliness\_\_\_\_\_?

- a. Biology
- b. Hygiene
- c. Morphology
- d. Sanitation

Answer key:-

1-c	29-a	57-c	85-d
2-a	30-c	58-c	86-a
3-c	31-b	59-c	87-b
4- a	32-b	60-a	88-c
5- b	33-b	61-b	89-b
6- d	34-a	62-d	90-c
7- c	35-a	63-b	91-d
8- c	36-b	64-c	92-a
9-b	37-b	65-a	93-d
10- c	38-b	66-d	94-a
11- a	39-b	67-a	95-b
12- b	40-c	68-a	96-a
13-b	41-3	69-a	97-c
14- d	42-2	70-b	98-b
15- c	43-1	71-c	99-b
16-b	44-1	72-c	100-b
17-a	45-3	73-c	
18-b	46-1	74-b	
19-c	47-3	75-a	
20-b	48-1	76-a	
21-a	49-3	77-a	
22-a	50-3	78-a	
23-a	51-1	79-a	
24-a	52-4	80-b	
25-b	53-1	81-b	
26-c	54-3	82-a	
27-d	55-2	83-d	
28-a	56-1	84-c	